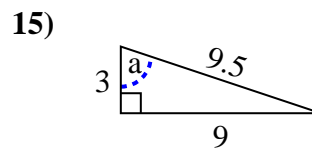
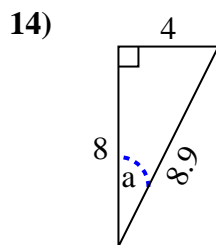
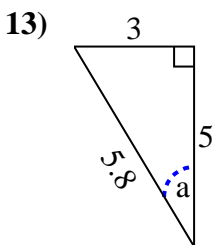
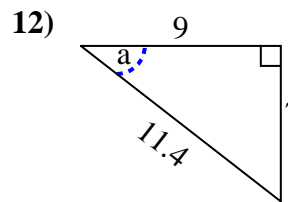
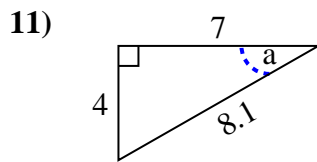
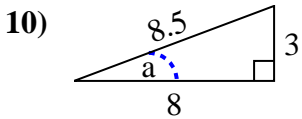
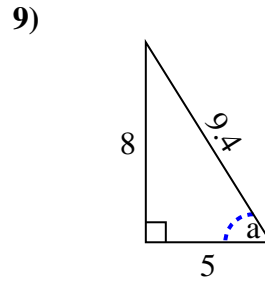
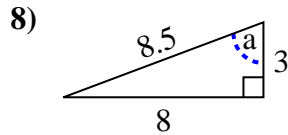
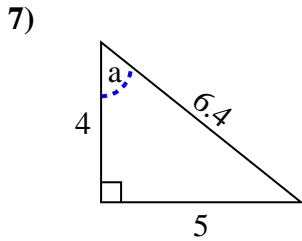
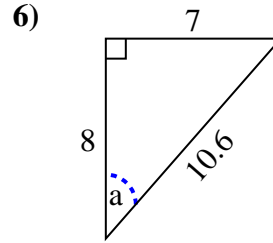
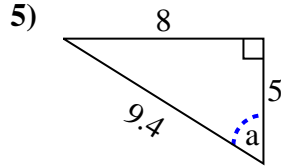
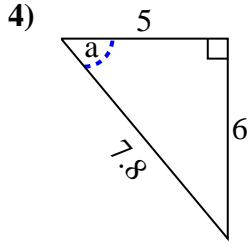
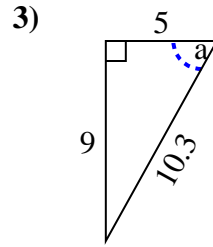
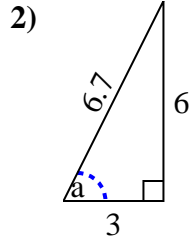
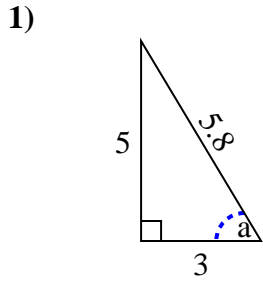




Identify the Opposite, Adjacent and Hypotenuse of Angle a.

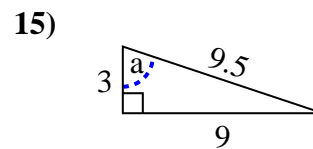
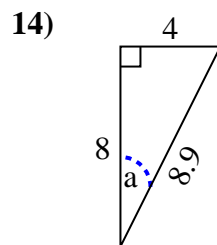
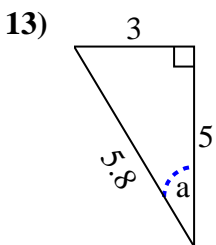
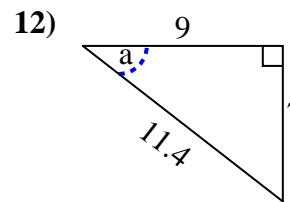
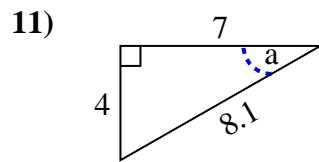
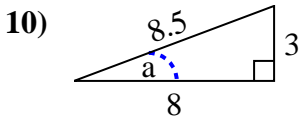
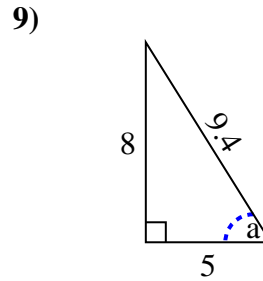
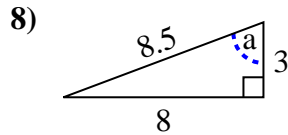
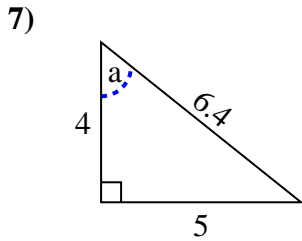
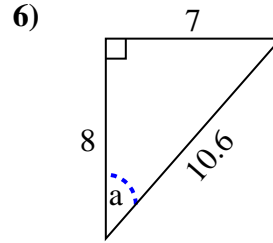
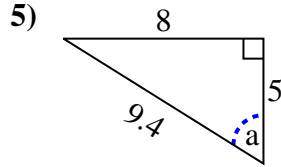
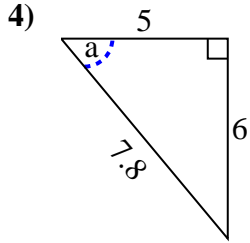
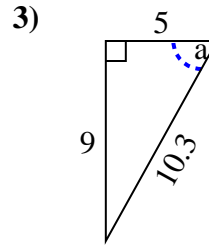
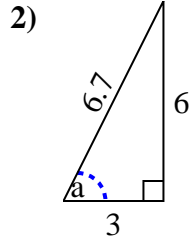
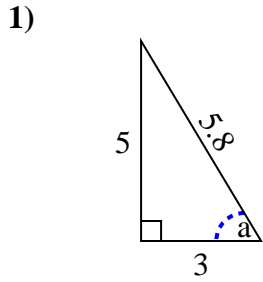
Answers



1. _____
2. _____
3. _____
4. _____
5. _____
6. _____
7. _____
8. _____
9. _____
10. _____
11. _____
12. _____
13. _____
14. _____
15. _____



Identify the Opposite, Adjacent and Hypotenuse of Angle a.



Answers

1. 5, 3, 5.8

2. 6, 3, 6.7

3. 9, 5, 10.3

4. 6, 5, 7.8

5. 8, 5, 9.4

6. 7, 8, 10.6

7. 5, 4, 6.4

8. 8, 3, 8.5

9. 8, 5, 9.4

10. 3, 8, 8.5

11. 4, 7, 8.1

12. 7, 9, 11.4

13. 3, 5, 5.8

14. 4, 8, 8.9

15. 9, 3, 9.5